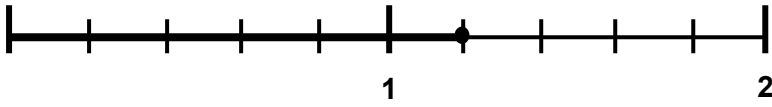
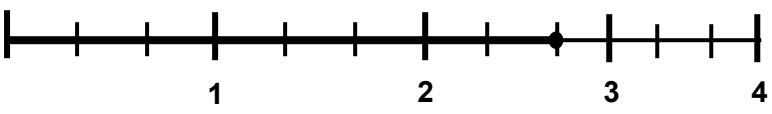
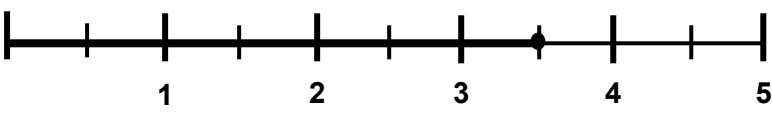
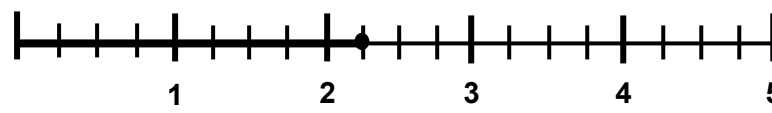


ב. מהו השבר המתאים? כתבי גם כמספר מעורב!

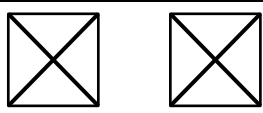

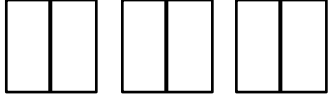

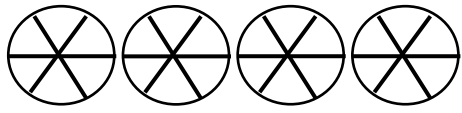

1.  $\frac{\square}{\square} = \frac{\square}{\square}$

2.  $\frac{\square}{\square} = \frac{\square}{\square}$

3.  $\frac{\square}{\square} = \frac{\square}{\square}$

4.  $\frac{\square}{\square} = \frac{\square}{\square}$

ג. השלימי את הטבלה:

המחשה:	שבר:	מספר מעורב:
	$\frac{5}{4}$	$1\frac{1}{4}$
		$2\frac{1}{3}$
	$\frac{3}{2}$	
		$1\frac{3}{4}$
	$\frac{7}{6}$	
	$\frac{5}{2}$	