

דף עבודה בחשבון- שברים

חלק א'- פתרי את התרגילים הבאים

$$\frac{3}{6} + \frac{1}{3} =$$

$$\frac{3}{4} + \frac{1}{3} =$$

$$\frac{2}{4} + \frac{1}{2} =$$

$$\frac{1}{3} + \frac{2}{8} =$$

$$\frac{2}{10} + \frac{3}{5} =$$

$$\frac{4}{5} + \frac{3}{6} =$$

חלק ב'- צמצמי את המספרים שלפניך

$$\frac{23}{6} =$$

$$\frac{42}{5} =$$

$$\frac{35}{10} =$$

$$\frac{27}{4} =$$

$$\frac{12}{9} =$$

$$\frac{30}{8} =$$


$$\frac{6}{2} =$$

$$\frac{41}{7} =$$




חלק ג'- שרטטי וסמני < > =


$\frac{1}{3}$ _____ $\frac{1}{6}$




$\frac{1}{5}$ _____ $\frac{3}{6}$




$\frac{3}{4}$ _____ $\frac{2}{3}$




$\frac{2}{6}$ _____ $\frac{5}{10}$



$\frac{2}{4}$ _____ $\frac{1}{2}$



$\frac{1}{5}$ _____ $\frac{4}{7}$



בהצלחה!