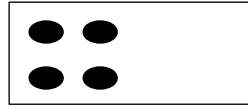


# דף עבודה :

א. הוסיפי בתבנית את הכמות המתאימה ופתרי את התרגיל:



$$2+1=\square$$



$$4+1=\square$$



$$1+5=\square$$

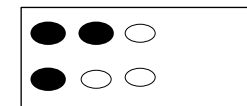
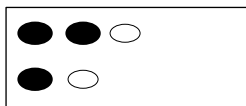
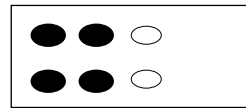
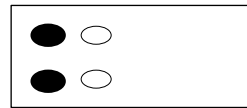
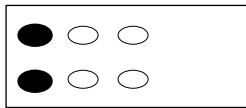


$$1+1=\square$$




$$1+3=\square$$


ב. כתבי תרגיל ע"פ התבנית שלפניך ופתרי:



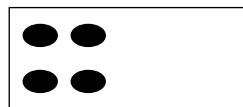
ג. הוסיפי בתבנית את התבנית המתאימה:



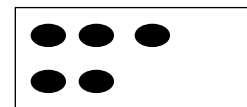
$$0+6=$$



$$2+0=$$




$$4+0=$$



$$5+0=$$



$$1+0=$$



$$0+3=$$