



מחקי מכל תבנית את מספר העיגולים שהורידו,
ופתרי את התרגיל:


$$\boxed{3} - \boxed{1} = \boxed{2}$$




$$\boxed{4} - \boxed{3} = \boxed{1}$$



$$\boxed{6} - \boxed{4} = \boxed{2}$$



$$\boxed{5} - \boxed{2} = \boxed{3}$$



צירי את מספר העיגולים המתאים לכל תבנית.

$$\boxed{8} - \boxed{4} = \boxed{4}$$



$$\boxed{5} - \boxed{3} = \boxed{2}$$



$$\boxed{7} - \boxed{6} = \boxed{1}$$

