
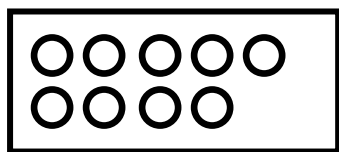




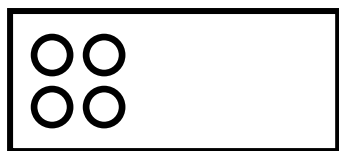
מחקי מכל תבנית בבת אחת את מספר העגולים שהורידו, בצורה של תבנית, ופתרי את התרגילים:



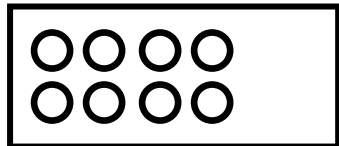
$$\boxed{8} - \boxed{6} = \boxed{2}$$



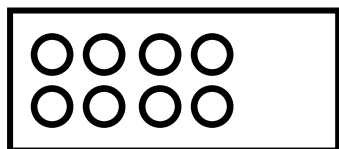
$$\boxed{9} - \boxed{6} = \boxed{}$$



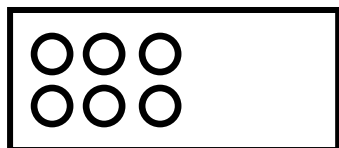
$$\boxed{4} - \boxed{2} = \boxed{}$$



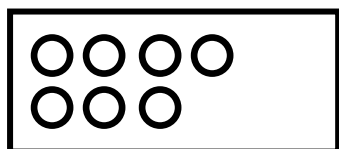
$$\boxed{8} - \boxed{8} = \boxed{}$$



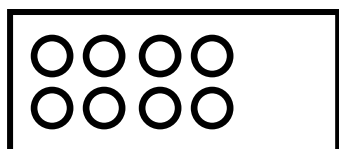
$$\boxed{8} - \boxed{4} = \boxed{}$$



$$\boxed{6} - \boxed{4} = \boxed{}$$



$$\boxed{7} - \boxed{4} = \boxed{}$$



$$\boxed{8} - \boxed{2} = \boxed{}$$