





צמצום שברים/דף עבודה

1. צמצמי את השברים הבאים וצבעי בהתאם:



$$\frac{4}{8} =$$



$$\frac{5}{10} =$$



$$\frac{6}{9} =$$



2. פתרי את התרגילים ע"י צמצום:

$$\frac{18}{42} =$$

$$\frac{15}{30} =$$

$$\frac{36}{54} =$$

$$\frac{32}{40} =$$

$$\frac{6}{24} =$$

$$\frac{10}{40} =$$

3. כתבי = או \neq

$$\frac{2}{3} \square \frac{8}{21}$$

$$\frac{4}{12} \square \frac{8}{32}$$

$$\frac{3}{7} \square \frac{24}{58}$$

$$\frac{3}{7} \square \frac{24}{58}$$

$$\frac{35}{40} \square \frac{7}{8}$$