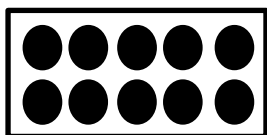
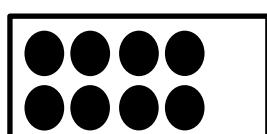
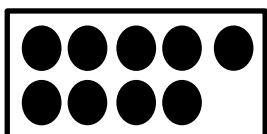


חיסור/דף עבודה

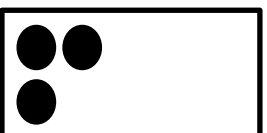
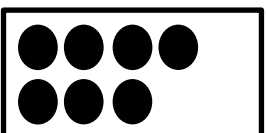
מחקי מכל מספר את הכמות שהורידו ופתרי את
התרגילים:




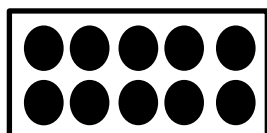
= _____



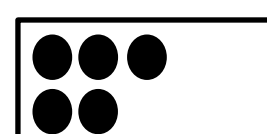

= _____



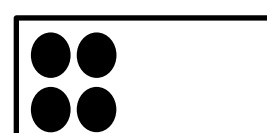

= _____




= _____



= _____



= _____



= _____