


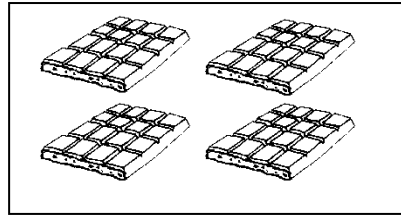
החיסור

1. כתבי את פתרון התרגילים:


א.



ב.



ג.



ד.




א. $\underline{\quad} - \underline{\quad} = \underline{\quad}$

ב. $\underline{\quad} - \underline{\quad} = \underline{\quad}$

ג. $\underline{\quad} - \underline{\quad} = \underline{\quad}$

ד. $\underline{\quad} - \underline{\quad} = \underline{\quad}$

2. השלימי את העץ:



$7 - \underline{\quad} = \underline{\quad}$

$7 - \underline{\quad} = \underline{\quad}$

$7 - \underline{\quad} = \underline{\quad}$

3. השלימי את הטבלה:

דינה	חנה
$\underline{\quad} - \underline{\quad} = \underline{\quad}$	$\underline{\quad} - \underline{\quad} = \underline{\quad}$
$\underline{\quad} - \underline{\quad} = \underline{\quad}$	$\underline{\quad} - \underline{\quad} = \underline{\quad}$
$\underline{\quad} - \underline{\quad} = \underline{\quad}$	$\underline{\quad} - \underline{\quad} = \underline{\quad}$