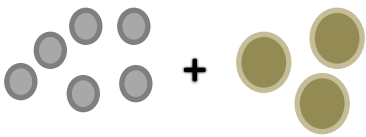
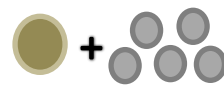

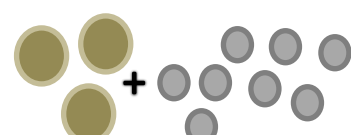
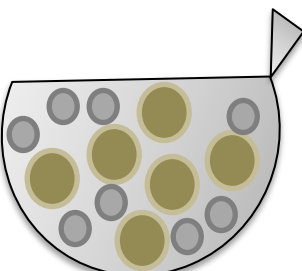
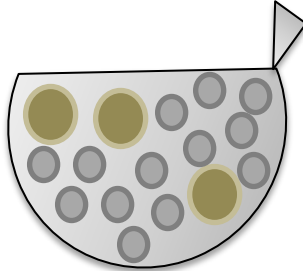
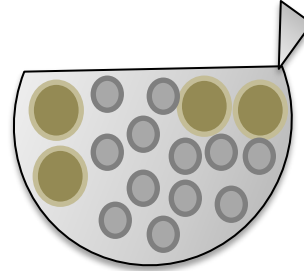
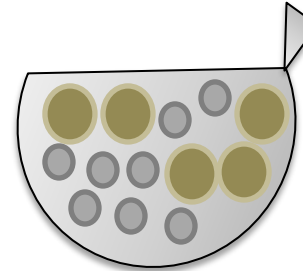


המרה

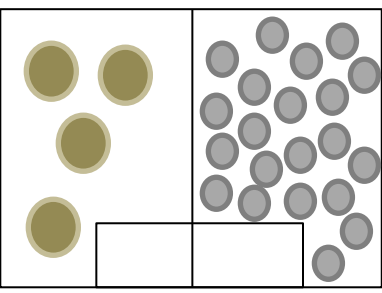
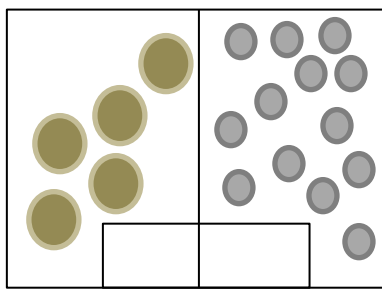
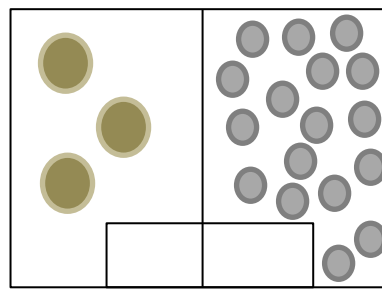
(1) הקיפי את התשובה הנכונה:

	$+$		$=$ 15
	$+$		$=$ 38

(2) כתבי כמה כסף יש בארנק:

			
<input style="width: 100px; height: 30px;" type="text"/>	<input style="width: 100px; height: 30px;" type="text"/>	<input style="width: 100px; height: 30px;" type="text"/>	<input style="width: 100px; height: 30px;" type="text"/>

(3) כתבי את המספר לאחר ההמרה?

		
<input style="width: 100px; height: 30px;" type="text"/>	<input style="width: 100px; height: 30px;" type="text"/>	<input style="width: 100px; height: 30px;" type="text"/>