



דף עבודה- חשבון

1. השלימי את המספר

_____ > 9

_____ > 4

2 < _____

_____ < 7

6 < _____

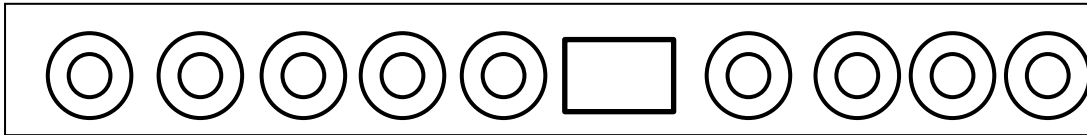
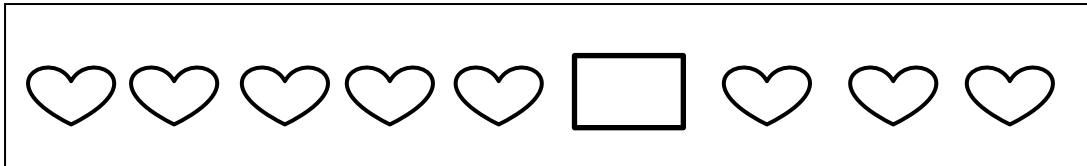
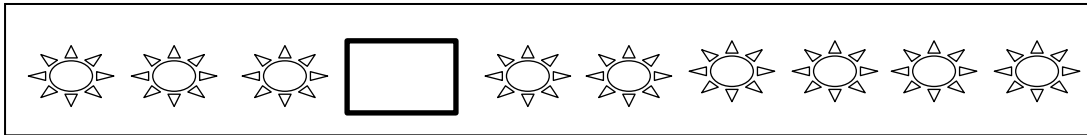
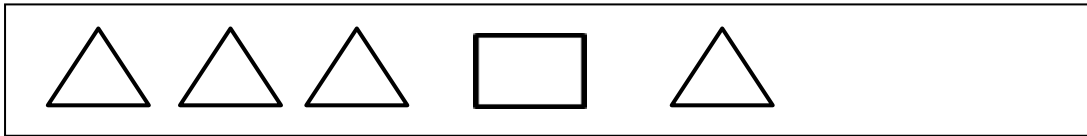

5 = _____

_____ = 3

1 < _____

10 > _____

2. סמני >, <, =



3. ציירי בהתאם לסימן

=

>
