


חיסור עד 6- דף עבודה

1. פתרי את התרגילים:


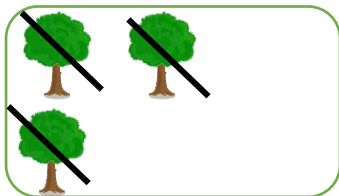



6-3=

4-3=

2-1=

2. כתבי תרגיל לפי התבנית:





_____ - _____ = _____

_____ - _____ = _____

_____ - _____ = _____

3. השלימי על פי התבניות:



6 - _____ = _____

4 - _____ = _____