


דף עבודה - חיסור

1. כתבי כמה נשאר?



על העץ 6


נפלו 4

כמה נשארו? \_\_\_\_\_


במגש 10

אכלו 5

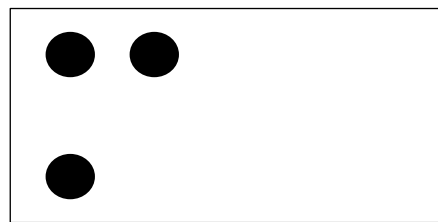
כמה נשארו? \_\_\_\_\_




2. כמה עיגולים נשארו?



$5 - 1 = \underline{\quad}$



$3 - 1 = \underline{\quad}$



$6 - 2 = \underline{\quad}$