








# המשך אחדות ועשרות

\_\_\_\_\_  

\_\_\_\_\_  

\_\_\_\_\_ 

ג. פתרי את התרגילים וכתבי עשרות או אחדות

$$\boxed{60} + \boxed{20} = \boxed{\phantom{00}}$$

$$\boxed{50} + \boxed{40} = \boxed{\phantom{00}}$$

$$\boxed{20} + \boxed{40} = \boxed{\phantom{00}}$$