



תרגילים במאונך תלת ספרתי בתלת ספרתי.

1. כתבי את התרגיל במאונך, ופתרי:

$349 + 115 =$



$251 + 159 =$



$715 + 196 =$



2. פתרי את התרגילים וסמני > = < :

$$\begin{array}{r} 852 \\ \underline{574} \\ \hline \end{array}$$

$$\begin{array}{r} 945 \\ \underline{656} \\ \hline \end{array}$$


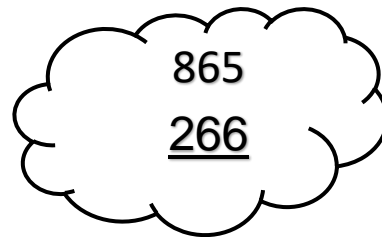

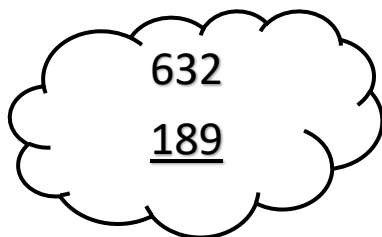
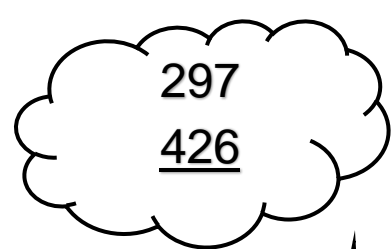

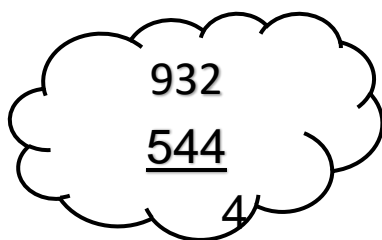

$$\begin{array}{r} 451 \\ \underline{262} \\ \hline \end{array}$$

$$\begin{array}{r} 291 \\ \underline{102} \\ \hline \end{array}$$

$$\begin{array}{r} 612 \\ \underline{436} \\ \hline \end{array}$$

$$\begin{array}{r} 920 \\ \underline{744} \\ \hline \end{array}$$

3. פתרי את התרגילים ומצאי את הפתרון בטיפות: צבעי כל זוג מתאים באותו הצבע.



בהצלחה!