










# חיבור וחיסור עד עשר


1. פתרי את התרגילים הבאים:

					
<input type="text"/>	<input type="text"/>	<input type="text"/>	<input type="text"/>	<input type="text"/>	<input type="text"/>


2. מחקי / הוסיפי לבבות לפי התרגיל ופתרי:




$9-6=$  \_\_\_\_\_




$5+3=$  \_\_\_\_\_




$7-3=$  \_\_\_\_\_



$6-3=$  \_\_\_\_\_



$5+5=$  \_\_\_\_\_



$8-4=$  \_\_\_\_\_

3. הוסיפי את הסימן המתאים:  $=$  /  $<$  /  $>$

$8-6$  \_\_\_\_\_  $3+4$

$6+4$  \_\_\_\_\_  $9+1$

$5+3$  \_\_\_\_\_  $8-6$

$5+5$  \_\_\_\_\_  $6+3$

$8-1$  \_\_\_\_\_  $8+1$

$10-0$  \_\_\_\_\_  $10+0$