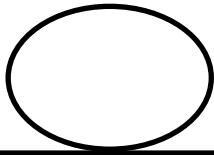
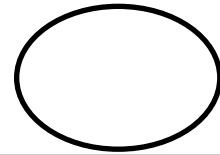


מרכיבי המספרים מ: 3-6

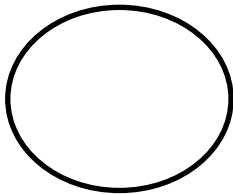
פתרי את הנעלם בתרגיל וכתבי בכל עיגול את המרכיב המתאים:



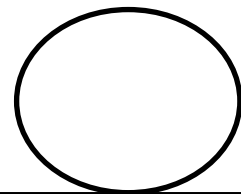
$3 + _ = 4$
 $1 + _ = 4$
 $2 + _ = 4$
 $0 + _ = 4$
 $4 + _ = 4$



$1 + _ = 3$
 $2 + _ = 3$
 $0 + _ = 3$
 $3 + _ = 3$



$5 + _ = 6$
 $1 + _ = 6$
 $4 + _ = 6$
 $2 + _ = 6$
 $3 + _ = 6$
 $0 + _ = 6$
 $6 + _ = 6$



$4 + _ = 5$
 $1 + _ = 5$
 $3 + _ = 5$
 $2 + _ = 5$
 $0 + _ = 5$
 $5 + _ = 5$