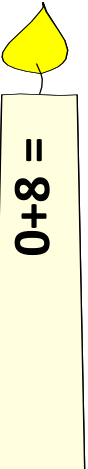
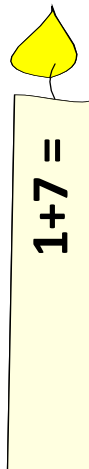


המספר 8

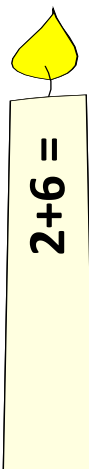
א. פיתרי את התרגילים הבאים:



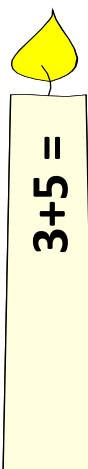
$0+8 =$



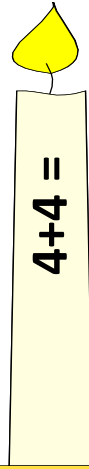
$1+7 =$



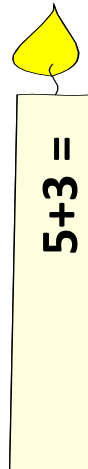
$2+6 =$



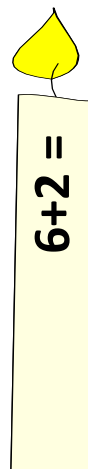
$3+5 =$



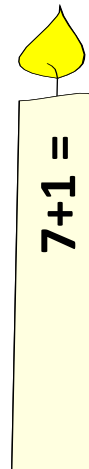
$4+4 =$




$5+3 =$



$6+2 =$



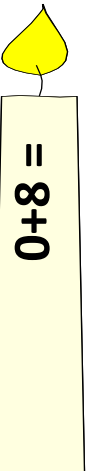
$7+1 =$



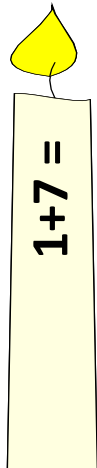
$8+0 =$

המספר 8

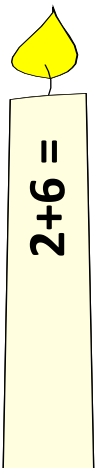
א. פיתרי את התרגילים הבאים:



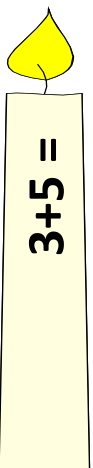
$0+8 =$



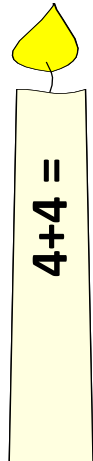
$1+7 =$



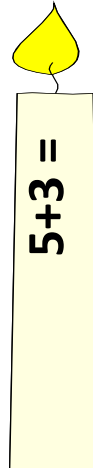
$2+6 =$



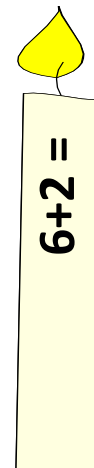
$3+5 =$



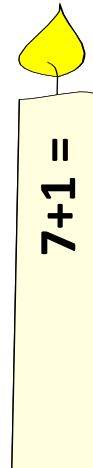
$4+4 =$



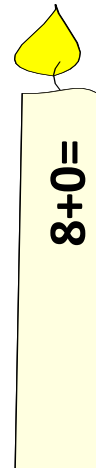
$5+3 =$



$6+2 =$



$7+1 =$



$8+0 =$