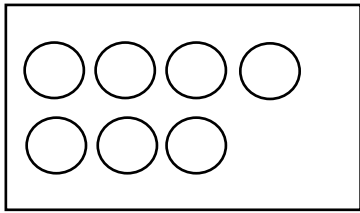
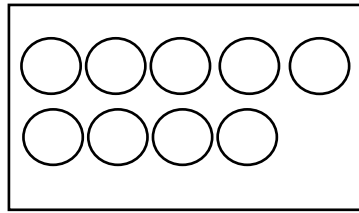


חיסור זוגי מאי זוגי:

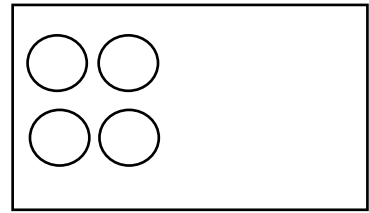
מחקי את העיגולים מן התבנית וכתבי את התוצאה:



$$\square - 2 = \square$$

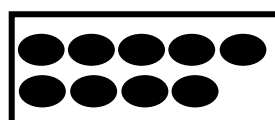
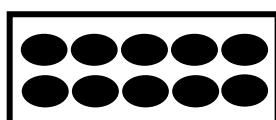
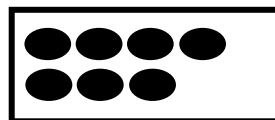
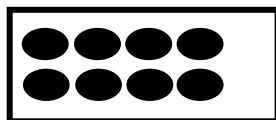


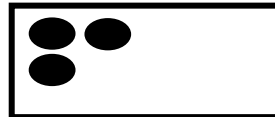



$$\square - 4 = \square$$



$$\square - 1 = \square$$

פתרי את התרגילים העזרי בלוח התבניות:



$$7 - 2 = \square$$

$$9 - 4 = \square$$

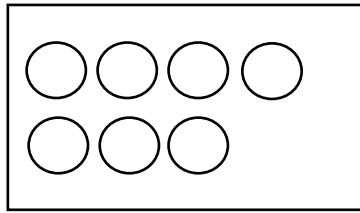
$$3 - 2 = \square$$

$$9 - \square = \square$$

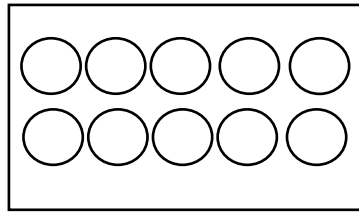
$$2 - 1 = \square$$

חיסור 1:

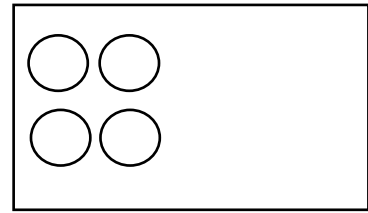
מחקי עיגול אחד מהתבנית וכתבי את התוצאה:



$$\square - 1 = \square$$

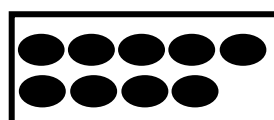
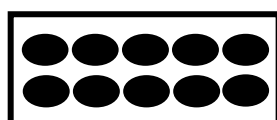
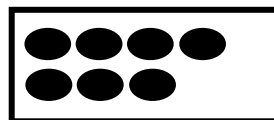
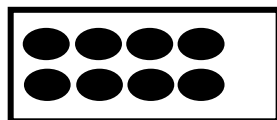


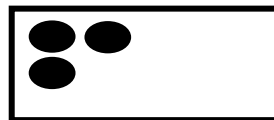



$$\square - 1 = \square$$



$$\square - 1 = \square$$

פתרי את התרגילים העזרי בלוח התבניות:



$$6 - 1 = \square$$

$$8 - 1 = \square$$

$$3 - 1 = \square$$

$$9 - 1 = \square$$

$$2 - 1 = \square$$