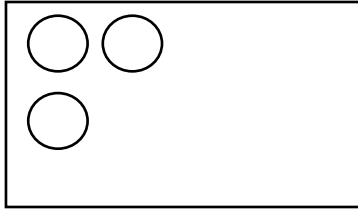
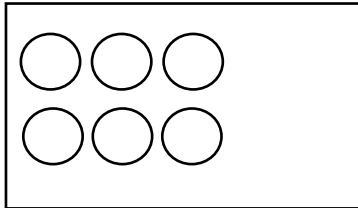


3. מחקי מכל תבנית את מספר העיגולים שהורידו

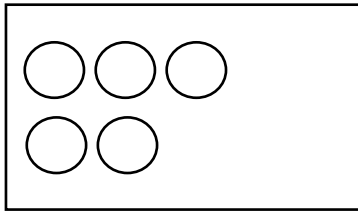
ופתרי את התרגיל:



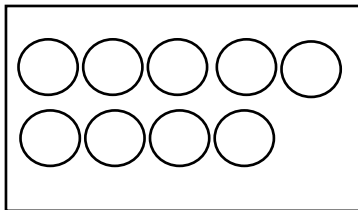
$$3-1=\square$$



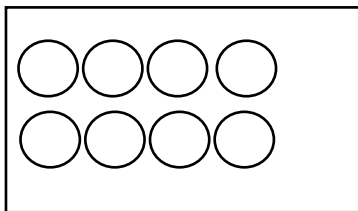
$$6-1=\square$$



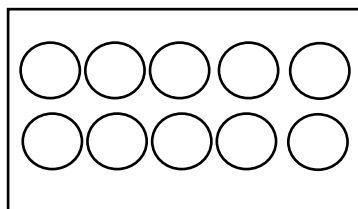
$$5-1=\square$$



$$9-1=\square$$



$$8-1=\square$$



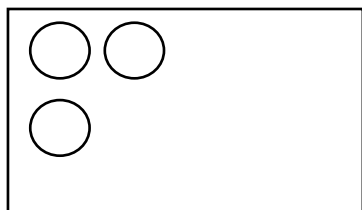
$$10-1=\square$$



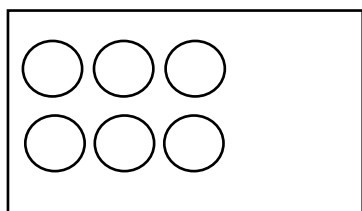
$$1-1=\square$$

3. מחקי מכל תבנית את מספר העיגולים שהורידו

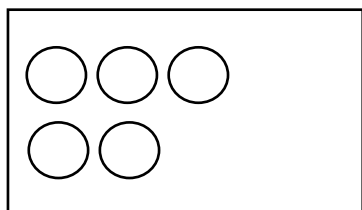
ופתרי את התרגיל:



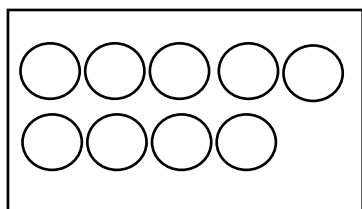
$$3-1=\square$$



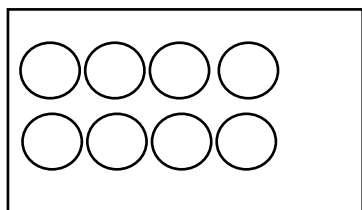
$$6-1=\square$$



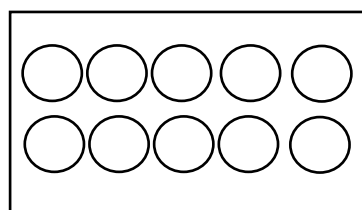
$$5-1=\square$$



$$9-1=\square$$



$$8-1=\square$$



$$10-1=\square$$



$$1-1=\square$$